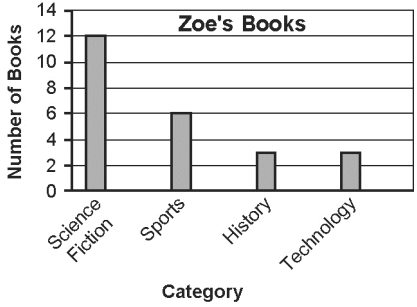
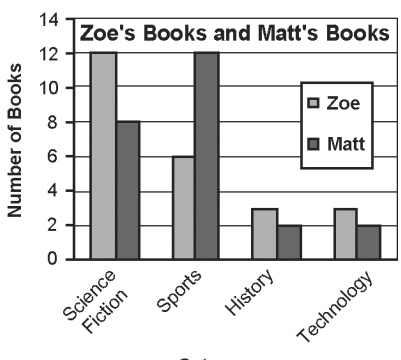
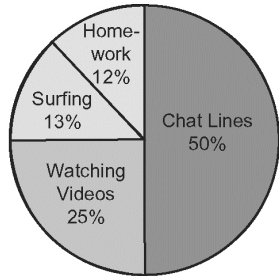


Date: \_\_\_\_\_

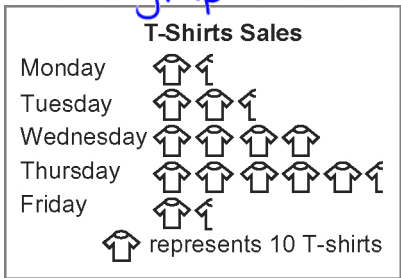
## 1.1 Advantages and Disadvantages of Different Graphs

Identify each graph:

Line Graph, Bar Graph, Double Bar Graph, Pictograph, Circle Graph

<p><b>Bar Graph</b></p>  <table border="1"><caption>Zoe's Books</caption><thead><tr><th>Category</th><th>Number of Books</th></tr></thead><tbody><tr><td>Science Fiction</td><td>12</td></tr><tr><td>Sports</td><td>6</td></tr><tr><td>History</td><td>3</td></tr><tr><td>Technology</td><td>3</td></tr></tbody></table>	Category	Number of Books	Science Fiction	12	Sports	6	History	3	Technology	3	<p>Good for showing amounts in each category.</p> <p>Compare categories using intervals.</p> <ul style="list-style-type: none"><li>- Can't find fractions or percents without doing some work.</li></ul>					
Category	Number of Books															
Science Fiction	12															
Sports	6															
History	3															
Technology	3															
<p><b>Double Bar Graph</b></p>  <table border="1"><caption>Zoe's Books and Matt's Books</caption><thead><tr><th>Category</th><th>Zoe</th><th>Matt</th></tr></thead><tbody><tr><td>Science Fiction</td><td>12</td><td>8</td></tr><tr><td>Sports</td><td>6</td><td>12</td></tr><tr><td>History</td><td>3</td><td>2</td></tr><tr><td>Technology</td><td>3</td><td>2</td></tr></tbody></table>	Category	Zoe	Matt	Science Fiction	12	8	Sports	6	12	History	3	2	Technology	3	2	<ul style="list-style-type: none"><li>- Great for comparing categories between 2 different groups.</li><li>- can determine actual numbers</li><li>- make comparisons using intervals.</li><li>- not best for finding fractions or percents.</li></ul>
Category	Zoe	Matt														
Science Fiction	12	8														
Sports	6	12														
History	3	2														
Technology	3	2														
<p><b>Circle Graph/Pie Chart</b></p> <p>Akira's Week on Internet (20 h)</p>  <table border="1"><caption>Akira's Week on Internet (20 h)</caption><thead><tr><th>Activity</th><th>Percentage</th></tr></thead><tbody><tr><td>Chat Lines</td><td>50%</td></tr><tr><td>Watching Videos</td><td>25%</td></tr><tr><td>Surfing</td><td>13%</td></tr><tr><td>Home-work</td><td>12%</td></tr></tbody></table>	Activity	Percentage	Chat Lines	50%	Watching Videos	25%	Surfing	13%	Home-work	12%	<p>Very good for comparing fractions or percents.</p> <ul style="list-style-type: none"><li>- not great for finding numbers.</li></ul> <p>fraction <math>\rightarrow</math> percent numerator <math>\div</math> denominator <math>\times 100</math></p>					
Activity	Percentage															
Chat Lines	50%															
Watching Videos	25%															
Surfing	13%															
Home-work	12%															

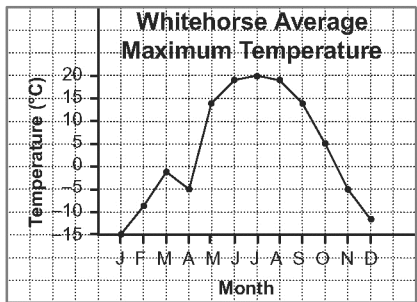
## Pictograph



- Visually appealing ways to compare amounts between categories.

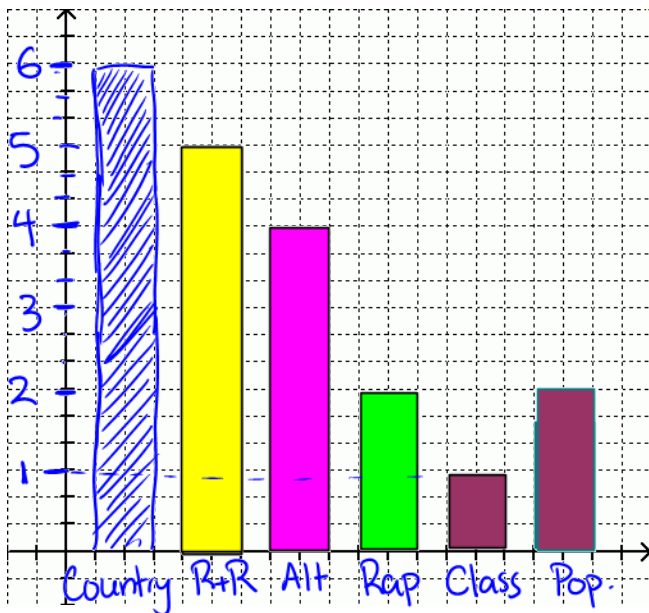
- parts of symbols → estimate  
- not good for percents / fractions

## Line Graph



- Great for showing changes over time

Christina is doing volunteer work in Uganda and asks several of the local people what their favourite music is. Use the table provided to create a bar graph showing their music preference



Music Preference	# of People
Country	6
Rock and Roll	5
Alternative	4
Rap	2
Classical	1
Pop	2

What kind of music was 3 times as popular as Rap?

How can you tell?

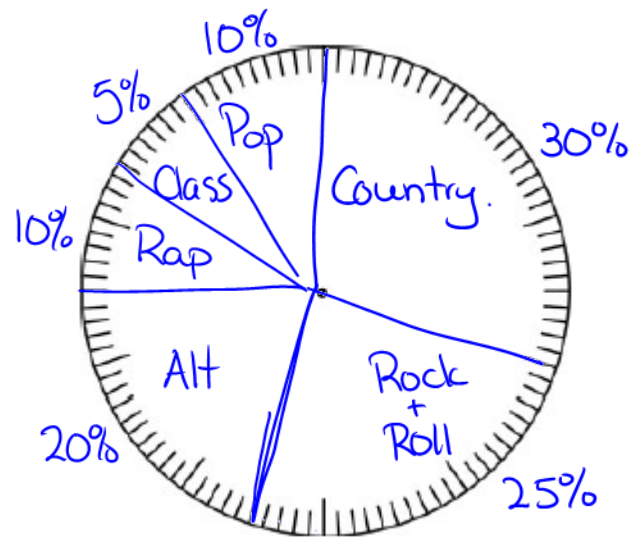
Country has a bar that is 3 times as many intervals.

## Drawing a Circle Graph

Alfonse wants to convert Christina's data into a circle graph. Two advantages of using a circle graph are:

- He can see the fractions or percents.
- He can predict the amounts for larger groups

Music Preference	# of People	Out of 100
Country	6	$\frac{6}{20} \times 100 = 30\%$
Rock and Roll	5	$\frac{5}{20} = \frac{25}{100} \quad 25\%$
Alternative	4	20%
Rap	2	10%
Classical	1	5%
Pop	2	10%
Total Number	20	100%



Suppose that there were 500 people surveyed. Could you make a prediction about how many people would like "Alternative" music?

$$\frac{20}{100} \xrightarrow{\times 5} \frac{100}{500}$$

100 out of 500 people would be expected.

How many people would like "Pop" music? There are two ways to find out!